

Lesson 3: Magic Gameland!













1. Can you remember?
Match the questions with the answers.

- | | |
|--|--------------------------------|
| 1. Where's the magic stone in Kelly's garden? | Harry, the hare. |
| 2. What's the colour of the bathroom in Puff's house? | Icarus. |
| 3. Who's got the pencil and rubber in the animal school? | It's in the grass. |
| 4. What does Arthur like most? | It's green. |
| 5. Who's getting close to the sun? | Spending time with his family. |

2. Can you remember? Read and write.




-  Everybody can do something but together *we can do everything!*
-  Easel, the weasel, is running. His tummy is empty but
-  Winter is cold, Spring is warm.
-  It's cool to be different, everybody
-  Too long, too short, too dark, too bright,
-  People are laughing and I can do nothing.
-  Icarus, be careful. You are
-  Keep the planet clean!
-  Work together and
-  It's not cool, it's not right.

Unit 10: The magic island



3. Follow the maze and say the magic phrases.



4. Write the correct answers and find the magic phrase.

1. What's in the box in Kelly's garden?
2. What's the parrot's name on Captain Cook's ship?
3. What's the treasure?
4. What's the colour of the door in Mr Ant's house?
5. Which animal is the fastest in the animal school?
6. Where does Arthur's grandfather listen to music?
7. How many people from Planet Recyclon can you spot in Lesson 2?
8. Who's wearing a jacket in the magic book 2?
9. What do Daedalus and Icarus use to make their wings?
10. What does Easel, the weasel, eat on Monday and Tuesday?

1. A $\frac{\quad}{13}$ and a $\frac{\quad}{15}$.
2. $\frac{S m a n t y}{7}$.
3. $\frac{\quad}{3}$ and $\frac{\quad}{12}$.
4. $\frac{\quad}{4}$.
5. $\frac{\quad}{9}$.
6. $\frac{\quad}{6}$ and $\frac{\quad}{14}$.
7. $\frac{\quad}{8}$.
8. $\frac{5}{\quad}$ and $\frac{\quad}{10}$.
9. $\frac{\quad}{2}$ and $\frac{\quad}{11}$.
10. $\frac{\quad}{16}$.

$\frac{\quad}{1} \frac{\quad}{2} \frac{\quad}{3} \frac{\quad}{4} \frac{\quad}{5}$

$\frac{r}{6} \frac{\quad}{7} \frac{\quad}{8} \frac{\quad}{9} \frac{\quad}{10} \frac{\quad}{11} \frac{\quad}{12} \frac{\quad}{13} \frac{\quad}{14} \frac{\quad}{15} \frac{\quad}{16}$!

Art time!


Think of your best friend and draw the feeling of friendship.



Project



The best things in life are not things. Create a poster to show what's good in your life.



Unit evaluation

How many stars for...?

The story



Songs and rhymes



Games / puzzles



Which are your favourite words and phrases? Write and say.



.....

.....

.....

.....

.....